

CMMC-2020

STD XII – MATHS, PHYSICS, CHEMISTRY | CBSE

Multiple Choice Questions | Number of questions: 120 | Max Marks: 120 | Time: 120 Minutes

MATHEMATICS (40 x 1 = 40 marks)

1) A_1 coincides with the set of all integers in Z which are related to A , A_2 coincides with the set of all integers which are related to B and A_3 coincides with the set of all integers in Z which are related to C . Here, A , B and C are respectively.

A) One, zero, two

B) Zero, one two,

C) Two, one, zero,

D) One, two, zero

2) If $A = \{x \in Z : 0 \leq x \leq 12\}$ and R is the relation in A given by

$R = \{(a, b) : |a - b| \text{ is a multiple of } 4\}$. Then, the set of all elements related to 1 is

A) $\{1, 4, 6\}$

B) $\{1, 5, 9\}$

C) $\{2, 4, 6\}$

D) $\{1, 3, 9\}$

3) If $f, g: R \rightarrow$ defined as]

$$f(x) = \begin{cases} x, & \text{if } x \text{ is rational} \\ 0, & \text{if } x \text{ is irrational} \end{cases}$$

and $g(x) = \begin{cases} x, & \text{if } x \text{ is rational} \\ 0, & \text{if } x \text{ is irrational} \end{cases}$

Then $F - G$ is

A) One -one

B) Neither one-one nor onto

C) Many -one

D) One-one and onto

4) Let $*$ be the binary operation on the set Q . Then match the terms of column I with the terms of column II and choose the correct option from the code given below.

Column II and choose the correct option from the codes given below.

Column I	Column II
A. $a * b = a - b$	1. Commutative
B. $a * b = a^2 + b^2$	
C. $a * b = a + ab$	2. Associative
D. $a * b = (a - b)^2$	
E. $a * b = \frac{ab}{4}$	3. Identity element exists
F. $a * b = ab^2$	4. Identity element does not exist

CMMC-2020

STD XII – MATHS, PHYSICS, CHEMISTRY | CBSE

Multiple Choice Questions | Number of questions: 120 | Max Marks: 120 | Time: 120 Minutes

Codes

	A	B	C	D	E	F
(a)	4	1,4	1,4	4	1,4	4
(b)	4	1	3	4	3	4
(c)	1	2,3	1,3	4	1,3	4
(d)	4	4	1,4	4	1,4	1,2,3

5) Let $f: N \rightarrow R$ be the function by $f(x) = \frac{2x-1}{2}$ and $g: Q \rightarrow R$ be another function

Defined by $g(x) = x + 2$. Then g of $\left(\frac{3}{2}\right)$ is

- A) -1 B) 1 C) $\frac{7}{2}$ D) None of these

6) Which of the following is/are true?

(i) The principal value of $\cos^{-1} \frac{\sqrt{3}}{2}$ is $\frac{\pi}{6}$

(ii) The principle value of $\operatorname{cosec}^{-1} 2$ is $\frac{\pi}{4}$

(iii) The principle value of $\tan^{-1}(-\sqrt{3})$ is $-\frac{\pi}{3}$

- A) (i),(ii) B) (ii), (iii) C) (i),(iii) D) (i),(ii),(iii)

7) Which of the following is the simplest form of $\cot^{-1} \left(\frac{1}{\sqrt{x^2-1}} \right), x > 1$?

- A) $\cos^{-1} x$ B) $\sec^{-1} x$ C) $\tan x$ D) $\cot x$

8) Statement I $\sin^{-1} \frac{5}{13} + \cos^{-1} \frac{3}{5} = \tan^{-1} \frac{63}{16}$

Statement II The simplified form of $\csc^{-1} \left(\frac{3}{5} \cos x + \frac{4}{5} \sin x \right),$ where $x = \left[-\frac{\pi}{2}, \frac{\pi}{4} \right]$ is $\tan^{-1} \left(\frac{4}{3} \right)$

- A) Only I is true B) Only II is true
C) Both I and II are true D) Neither I nor II is true

9) If $a_1, a_2, a_3, \dots, a_n$ is an arithmetic progression with common difference d , then the value of the expression,

CMMC-2020

STD XII – MATHS, PHYSICS, CHEMISTRY | CBSE

Multiple Choice Questions | Number of questions: 120 | Max Marks: 120 | Time: 120 Minutes

$$\tan \left[\tan^{-1} \left(\frac{d}{1+a_1a_2} \right) + \tan^{-1} \left(\frac{d}{1+a_2a_3} \right) + \dots + \tan^{-1} \left(\frac{d}{1+a_{n-1}a_n} \right) \right] \text{ is}$$

- A) $a_n - a_1$ B) $\frac{a_n - a_1}{a_1 a_n}$ C) $\frac{a_n - a_1}{1 + a_n a_1}$ D) Does not exist

10) The value of $\cos \left[2 \cos^{-1} \frac{1}{5} + \sin^{-1} \frac{1}{5} \right]$ is

- A) $\frac{2\sqrt{6}}{5}$ B) $\frac{-2\sqrt{6}}{5}$ C) $\frac{1}{5}$ D) $-\frac{1}{5}$

11) If Radha has 15 notebooks and 6 pens, Fauzia has 10 notebooks and 2 pens and Simran has 13 notebooks and 5 pens, then the above information is expressed as

$$\text{I} \begin{bmatrix} 15 & 6 \\ 10 & 2 \\ 13 & 5 \end{bmatrix} \quad \text{II} \begin{bmatrix} 15 & 10 & 13 \\ 6 & 2 & 5 \end{bmatrix}$$

- A) Only by I B) Only by II C) By I or II D) None of the above

12) If two matrices A and B are equal, we write A=B.

Now, if $\begin{bmatrix} x & y \\ z & a \\ b & c \end{bmatrix} = \begin{bmatrix} -1.5 & 0 \\ 2 & \sqrt{6} \\ 3 & 2 \end{bmatrix}$, then the values of x,y,z,a,b,c are

- A) $x = -1.5, y = \sqrt{6}, z = 2, a = 0, b = 2, c = 3$
B) $x = -1.5, y = 0, z = \sqrt{6}, a = 2, b = 2, c = 3$
C) $x = -1.5, y = 2, z = 2, a = \sqrt{6}, b = 3, c = 0$
D) $x = -1.5, y = 0, z = 2, a = \sqrt{6}, b = 3, c = 2$

13) If $A = [a_{ij}]$ and $B = [b_{ij}]$ be two matrices of the same order, (say $m \times n$).

Also, k and l are scalars. Then, consider the following statements

- I. $k(A + B) = kA + kB$
II. $(k + l)A = kA + lA$

Choose the correct option

- A) Only I is true
B) Only II is true
C) Both I and II are true
D) Neither I nor II is true

CMMC-2020

STD XII – MATHS, PHYSICS, CHEMISTRY | CBSE

Multiple Choice Questions | Number of questions: 120 | Max Marks: 120 | Time: 120 Minutes

14) A manufacturer sells the products x,y,z in two markets, annual sales are indicated below:

Market	Product		
I	10000	2000	18000
II	6000	20000	8000

Now, consider the following statements

I. If unit sale prices of x,y and z are Rs.2.50, Rs.1.50 and Rs.1.00 respectively, then the total revenue in Market I and market II is Rs. 46000 and Rs. 53000 respectively.

II. If unit sale prices of x,y and z are Rs.2.00, Rs.1.00 and 50 paise respectively, then the gross profit is Rs.32000.

Choose the correct answer

- A) Only I is true
- B) Only II is true
- C) Both I and II are true
- D) Neither I nor II is true.

15) The interchange of i^{th} and j^{th} rows is denoted by ...A... and interchange of i^{th} and j^{th}

Coloums is denoted by ...B... . Here, A and B are respectively

- A) $R_i \leftrightarrow R_j$ and $C_i - C_j$
- B) $R_i \leftrightarrow R_j$ and $C_i \leftrightarrow C_j$
- C) $C_i \leftrightarrow C_j$ and $R_i \leftrightarrow R_j$
- D) $R_j \leftrightarrow 1 + R_j$ and $C_j \leftrightarrow 1 + C_j$

16) If A is a matrix such that A^{-1} exists, then to find A^{-1} using elementary row operations,

Write ...E... and apply a sequence of ... F... operation on $A=IA$ till we get ... G... .

The matrix B will be the inverse of A. Here, E,F and G are respectively

- A) $A=IA, A=IA, I=AB$
- B) $A=AI, A=AI, I=AB$
- C) $A= AI, A=IA, I=AB$
- D) $A=iA, A=AI, i=AB$

CMMC-2020

STD XII – MATHS, PHYSICS, CHEMISTRY | CBSE

Multiple Choice Questions | Number of questions: 120 | Max Marks: 120 | Time: 120 Minutes

17) If $\Delta = \begin{vmatrix} 1 & 2 & 4 \\ -1 & 3 & 0 \\ 4 & 1 & 0 \end{vmatrix}$ is

- A) -1 B) 1 C) 0 D) -2

18) The value of

$$\Delta = \begin{vmatrix} a & b & c \\ a + 2x & b + 2y & c + 2z \\ x & y & z \end{vmatrix}$$
 is

- A) 0 B) 1 C) -1 D) 2

19) If the points (a_1, b_1) , (a_2, b_2) and $(a_1 + a_2, b_1 + b_2)$ are collinear, then

- A) $a_1 b_1 = a_2 b_2$ B) $a_1 b_2 = a_2 b_1$
C) $a_1 a_2 = b_1 b_2$ D) $a_1 - b_2 = a_2 - b_1$

20) Let $A = \begin{bmatrix} 1 & -2 & 1 \\ -2 & 3 & 1 \\ 1 & 1 & 5 \end{bmatrix}$. Then, consider the following statements

I. $[\text{adj } A]^{-1} = (\text{adj } A^{-1})$

II. $(A^{-1})^{-1} = A$

Choose the correct option

- A) Only I is true
B) Only II is true
C) Both I and II is true
D) Neither I nor II is true

21) The cost of 4 kg onion, 3 kg wheat and 2 kg rice is Rs.60. The cost of 2 kg onion, 2 kg wheat and 3 kg rice is Rs.90. The cost of 6 kg onion, 2kg wheat and 3 kg rice is Rs.70. The cost (in Rs) of onion, wheat and rice per kilogram are respectively

- A) 5,9,10 B) 5,8,8 C) 8,5,8 D) 8,8,5

22) Let A be a square matrix, all of whose entries are integers. Then, which of the following is true?

- A) If $\det(A) = \pm 1$, then A^{-1} need not exist
B) If $\det(A) = \pm 1$, then A^{-1} exist but all its entries are non-integers

CMMC-2020

STD XII – MATHS, PHYSICS, CHEMISTRY | CBSE

Multiple Choice Questions | Number of questions: 120 | Max Marks: 120 | Time: 120 Minutes

C) If $\det(A) = \pm 1$, then A^{-1} exist and all its entries are non-integers

D) If $\det(A) = \pm 1$, then A^{-1} exist and all its entries are integers

23) An amount of Rs. 5000 is put into three investments at the rate of interest 6%, 7% and 8% per annum, respectively. The total annual income is Rs.358. If the combined income from the first two investments is Rs.70 more than the income from the third, then the amount of each investment (in Rs) is

A) 1000, 2200, 180

B) 1000, 2000, 1100

C) 1000, 2200, 1800

D) 2200, 1800, 1100

24) If l , m and n are the

p^{th} , q^{th} and r^{th} terms of a GP and all are positive, then
$$\begin{bmatrix} \log l & p & 1 \\ \log m & q & 1 \\ \log n & r & 1 \end{bmatrix}$$

Is equal to

A) 3

B) 2

C) 1

D) 0

25) If we can draw the graph of the function around a point without lifting the pen from the plane of the paper, then the function is said to be

A) Not continuous, $f(c)$

B) Not continuous, 0

C) Continuous, $f(c)$

D) None of these

26) All the points discontinuity of the function f defined by $f(x) = \begin{cases} 3, & \text{if } 0 \leq x \leq 1 \\ 4, & \text{if } 1 < x < 3 \\ 5, & \text{if } 3 \leq x \leq 10 \end{cases}$ are

A) 1,3

B) 3,10

C) 1,3,10

D) 0,1,3

27) The function $f: R - \{0\} \rightarrow R$ given by $f(x) = \frac{1}{x} - \frac{2}{e^{2x}-1}$ can be made continuous at $x = 0$ By defining $f(0)$ as

A) 2

B) -1

C) 0

D) 1

28) Let $f(x) = \begin{cases} (x-1)\sin\frac{1}{(x-1)}, & \text{if } x \neq 1 \\ 0, & \text{if } x = 1 \end{cases}$. Then, which of the following is true?

A) f is differentiable at $x = 1$ but not at $x = 0$

B) f is neither differentiable at $x = 0$ nor at $x = 1$

C) f is differentiable at $x = 0$ and at $x = 1$

CMMC-2020

STD XII – MATHS, PHYSICS, CHEMISTRY | CBSE

Multiple Choice Questions | Number of questions: 120 | Max Marks: 120 | Time: 120 Minutes

D) f is differentiable at $x = 0$ but not at $x = 1$

29) If $f: (-1,1) \rightarrow R$ be a differentiable function with $f(0) = -1$ and $f'(0) = 1$.

Let $g(x) = [f(2f(x) + 2)]^2$. Then, $g'(0)$ is equal to

- A) 4 B) -4 C) 0 D) -2

30) If condition of MVT are satisfied, then there is a point c in (a, b) such that the slope of the tangent at $(c, f(c))$ is same as the slope of ... A... between $(a, f(a))$ and $(b, f(b))$.

In other words, there is a point c in (a, b) such that the tangent at $(c, f(c))$ is .. B... to the secant between $(a, f(a))$ and $(b, f(b))$.

Here, A and B refer to

- A) Parallel, parallel B) Secant, parallel
C) Tangent, parallel D) None of these

31) Sand is pouring from a pipe at the rate of $12 \text{ cm}^3/\text{s}$. The falling sand forms a cone on the ground in such a way that the height of the cone is always one-sixth of radius of the base. The rate at which the height of the sand cone is increasing when the height is 4 cm, is

- A) $48\pi \text{ cm/s}$ B) $24\pi \text{ cm/s}$
C) $\frac{1}{48\pi} \text{ cm/s}$ D) $\frac{7}{48\pi} \text{ cm/s}$

32) A kite is moving horizontally at the height of 151.5m. If the speed of kite is 10m/s, then the rate of which the string is being let out; when the kite is 250 m away from the boy who is flying the kite and the height of the boy is 1.5 m, is

- A) 4 m/s B) 6 m/s C) 7 m/s D) 8 m/s

33) The points on the curve $x^2 + y^2 - 2x + 3 = 0$ at which the tangents are parallel to the X-axis, are

- A) (1 ± 2) B) (1 ± 3)
C) (2 ± 2) D) None of these

34) The angle between the curves $y = a^x$ and $y = b^x$ is equal to

- A) $\tan^{-1} \left(\left| \frac{a-b}{1+ab} \right| \right)$ B) $\tan^{-1} \left(\left| \frac{a+b}{1-ab} \right| \right)$
C) $\tan^{-1} \left(\left| \frac{\log b + \log a}{1 + \log a \log b} \right| \right)$ D) $\tan^{-1} \left(\left| \frac{\log a + \log b}{1 + \log a \log b} \right| \right)$

35) The circumference of a circle is measured at 56 cm with an error of 0.02 cm. The percentage error in area is

- A) $\frac{1}{2}$ B) $\frac{1}{28}$ C) $\frac{1}{14}$ D) $\frac{1}{56}$

CMMC-2020

STD XII – MATHS, PHYSICS, CHEMISTRY | CBSE

Multiple Choice Questions | Number of questions: 120 | Max Marks: 120 | Time: 120 Minutes

36) If an apache helicopter of enemy is flying along the curve given by $y = x^2 + 7$. A soldier, placed at (3,7) wants to shoot down the helicopter when it is nearest to him.

Then, the nearest distance between soldier and the helicopter is

- A) $\sqrt{3}$ B) $\sqrt{5}$ C) $\sqrt{7}$ D) Non of these

37) If 12 is divided into two parts such that the product of the square on one part and the fourth power of the second part is maximum, then its parts are

- A) 5, 7 B) 6, 6 C) 3, 9 D) 4, 8

38) Family of curves $y = f(x) + c$ can be represented geometrically by shifting any one of the curves ...A... to itself. Here, A refers to

- A) Perpendicular B) Parallel
C) Both (a) and (b) D) None of these

39) When a polynomial function P is differentiated and integrated the result is a polynomial whose degree is one ... x .. and one ... y... than the degree of P respectively. Here, x and y are respectively.

- A) More; less B) More; more
C) Less ; more D) Less ; less

40) $\int \frac{\cos 2x - \cos 2\alpha}{\cos x - \cos \alpha} dx$ is equal to

- A) $2\sin x + 2x\sin \alpha + c$ B) $2\sin x + 2x\cos \alpha + c$
C) $2\cos x + 2x\sin \alpha + c$ D) $2\cos x + 2x\cos \alpha + c$

CMMC-2020

STD XII – MATHS, PHYSICS, CHEMISTRY | CBSE

Multiple Choice Questions | Number of questions: 120 | Max Marks: 120 | Time: 120 Minutes

PHYSICS (40 x 1 = 40 marks)

- In general, metallic ropes are suspended on the carriers which take inflammable material. The reason is
 - their speed is controlled
 - to keep the gravity of the carrier nearer to Earth
 - to keep the body of the carrier in contact with the Earth.
 - nothing should be placed under the carrier
- A glass rod rubbed with silk is used to charge a gold leaf electroscope and the leaves are observed to diverge. The electroscope thus charged is exposed to X-rays for a short period. Then,
 - the divergence of leaves will not be affected.
 - the leaves will diverge further
 - the leaves will collapse
 - the leaves will melt
- Statement I: Metallic bodies of electric appliances such as electric iron, refrigerator, TV are connected to the earth wire.
Statement II: When any fault occurs or live wire touches the metallic body, the charge flows to the Earth without damaging the appliance and without causing any injury to the human using appliance.
 - Both I, II are correct, II explains I
 - Both I, II are correct but II does not explain I
 - I is correct, II is incorrect
 - I is incorrect, II is correct
- If F_{21} and F_{12} indicate force on q_2 due to q_1 and on q_1 due to q_2 respectively, then which of these are true?
 - $F_{12} = -F_{21}$
 - $|F_{12}| = |F_{21}|$
 - $F_{21} = \frac{1}{4\pi\epsilon_0} \frac{q_1 q_2}{r_{21}^2} \hat{r}_{21}$
 - $F_{12} = F_{21}$
 - I, II and IV
 - II, III and IV
 - I, III and IV
 - I, II and III
- An electric field line is a curve drawn such that the tangent at any point of it,
 - points in the direction of positive charge
 - points in the direction of negative charge
 - points in the direction perpendicular to line joining charges
 - points in the direction of net field at that point
- Electric charges q , q , $-2q$ are placed at the corners of an equilateral ΔABC of side l . The magnitude of electric dipole moment of the system is

CMMC-2020

STD XII – MATHS, PHYSICS, CHEMISTRY | CBSE

Multiple Choice Questions | Number of questions: 120 | Max Marks: 120 | Time: 120 Minutes

- A. ql B. $2ql$ C. $\sqrt{3}ql$ D. $4ql$

7. Statement I : If a long wire of charge density λ is considered, then field at every point near the wire is radial (outward for $\lambda > 0$, inward for $\lambda < 0$)

Statement II: Normal components of different sections of wire cancels out each other.

- A. Both I and II are correct and II is a correct explanation of I
B. Both I and II are correct and II is a not a correct explanation of I
C. I is correct and II is incorrect
D. I is incorrect and II is correct

8. Two points P and Q are maintained at the potentials of 10V and -4V respectively. The work done in moving 100 electrons from P to Q is

- A. -9.60×10^{-17} J B. 9.60×10^{-17} J C. -2.24×10^{-16} J D. 2.24×10^{-16} J

9. The electrostatic potential of a uniformly charged thin spherical shell of charge Q and radius R at a distance r from the centre is

- A. $\frac{Q}{4\pi\epsilon_0 r}$ for points outside and $\frac{Q}{4\pi\epsilon_0 R}$ for points inside the shell
B. $\frac{Q}{4\pi\epsilon_0 r}$ for both points inside and outside the shell
C. Zero for points outside and $\frac{Q}{4\pi\epsilon_0 r}$ for points inside the shell
D. Zero for both points inside and outside the shell

10. An electric dipole consists of two opposite charges each $0.05 \mu\text{C}$ separated by 30 mm. The dipole is placed in a uniform external electric field of 10 NC^{-1} . The maximum torque exerted by the field on the dipole is

- A. $6 \times 10^{-3} \text{ Nm}$ B. $3 \times 10^{-3} \text{ Nm}$ C. $15 \times 10^{-3} \text{ Nm}$
D. $1.5 \times 10^{-3} \text{ Nm}$

11. The potential at a point x (measured in μm) due to some charges situated on the X-axis is given by $V(x) = \frac{20}{(x^2-4)}$ volt

The electric field E at $x = 4 \mu\text{m}$ is given by

- A. $10 / 9 \text{ V} / \mu\text{m}$ and in the + ve x- direction
B. $5 / 3 \text{ V} / \mu\text{m}$ and in the - ve x- direction
C. $5 / 3 \text{ V} / \mu\text{m}$ and in the + ve x- direction
D. $10 / 9 \text{ V} / \mu\text{m}$ and in the - ve x- direction

12. The examples of polar molecules are

- A. HCl B. H_2O C. NH_3 D. both A and B

13. Is there any work done in moving a test charge over an equipotential surface?

- A. No B. Yes C. Constant D. None of these

14. In which material, electric currents develop when an electric field is applied?

CMMC-2020

STD XII – MATHS, PHYSICS, CHEMISTRY | CBSE

Multiple Choice Questions | Number of questions: 120 | Max Marks: 120 | Time: 120 Minutes

A. Conductor B. Wooden piece C. Non-conductor D. Insulator

15. In $R = \rho \frac{l}{A}$, ρ is known as

A. resistance B. resistivity C. density D. volume

16. A resistor has colour code of green, blue, brown and silver. What is the resistance?

A. $5600 \Omega \pm 10\%$ B. $560 \Omega \pm 5\%$
C. $560 \Omega \pm 10\%$ D. $56 \Omega \pm 5\%$

17. The resistance of the platinum wire of a platinum resistance thermometer at the ice point is 5Ω and at steam point 5.23Ω . When the thermometer is inserted in a hot bath, the resistance of the platinum wire is 5.795Ω . Calculate the temperature of the bath.

A. 345.65°C B. 345.65 K C. 300°C D. 320°C

18. Two resistances R and $2R$ are connected in parallel in an electric circuit. The thermal energy developed in

R and $2R$ in the ratio

A. $1 : 2$ B. $1 : 4$ C. $4 : 1$ D. $2 : 1$

19. In a potentiometer experiment for measuring the emf of cell, the null point is at 480 cm when we have a 400Ω resistor in series with the cell and galvanometer. If the series resistances are reduced to half, the null point will be at

A. 120 cm B. 240 cm C. 480 cm D. 600 cm

20. If a proton is projected in a direction perpendicular to a uniform magnetic field with velocity v and an electron is projected along the magnetic lines of force, what will happen to proton and electron?

A. The electron will travel along a circle with constant speed and the proton will move along a straight line
B. Proton will move in a circle with constant speed and there will be no effect on the motion of electron
C. There will not be any effect on the motion of electron and proton
D. The electron and proton both will follow the path of a parabola

21. A charged particle continues to move with constant velocity in a region, where

I. $E = 0, B \neq 0$ II. $E \neq 0, B \neq 0$ III. $E \neq 0, B = 0$ IV. $E = 0, B = 0$

Correct options are

A. I, II and III B. I, II and IV C. II, III and IV D. I, III and IV

22. A long straight wire of radius a carries a steady current I . The current is uniformly distributed across its cross-section. The ratio of magnetic field at $a/2$ and $2a$ is

A. $\frac{1}{4}$ B. 4 C. 1 D. $\frac{1}{2}$

CMMC-2020

STD XII – MATHS, PHYSICS, CHEMISTRY | CBSE

Multiple Choice Questions | Number of questions: 120 | Max Marks: 120 | Time: 120 Minutes

23. Two long parallel straight wires A and B carrying currents of 4.0 A and 5.0 A in same direction separated by a distance of 4×10^{-2} m. The force on a 0.10 m section of wire A is
- A. 2×10^{-5} N towards B B. 2×10^{-5} N away from B
C. 2×10^{-5} N perpendicular to B D. 2×10^{-5} N parallel to B
24. Two similar coils are placed mutually perpendicular such that their centres coincides. At centre, the ratio of the magnetic field due to one coil and the resultant magnetic field of both coils for same current will be
- A. $1 : \sqrt{2}$ B. $1 : 2$ C. $2 : 1$ D. $\sqrt{3} : 1$
25. Two long conductors carrying I_1 and I_2 currents in same direction, separated by a distance d , placed parallel to each other. They exert a force F on each other. Now, current in one of them is increased to two times and its direction is reversed. The distance is also increased to $3d$. The new value of force between them is
- A. $-2F$ B. $\frac{F}{3}$ C. $-\frac{2F}{3}$ D. $-\frac{F}{3}$
26. A short bar magnet of magnetic moment $m = 0.32$ J / T is placed in a uniform magnetic field of 0.15 T. If the bar is free to rotate in the plane of the field the potential energy which would correspond to its unstable equilibrium?
- A. 4.8×10^{-2} J B. -4.8×10^{-2} J C. 7.5×10^{-2} J D. 3.6×10^5 J
27. A magnet with moment P_m is given. If it is bent into a semi-circular form, its new magnetic moment will be
- A. p_m / π B. $p_m / 2$ C. p_m D. $2p_m / \pi$
28. If a magnet is suspended at an angle 30° to the magnetic meridian, the dip needle makes an angle of 45° with the horizontal. The real dip is
- A. $\tan^{-1} \left(\sqrt{\frac{3}{2}} \right)$ B. $\tan^{-1} (\sqrt{3})$ C. $\tan^{-1} (\sqrt{3} / 2)$ D. A.
 $\tan^{-1} (2/\sqrt{3})$
29. A sample of cast iron exhibits a magnetic field (B) of 0.5 T when the magnetic field intensity is $H = 10$ A/m. What would be the field in air for this value of H ?
- A. 0.5×10^{-6} T B. $4\pi \times 10^{-6}$ T C. 15×10^{-2} T D. 11.5×10^{-2} T
30. If the magnetic dipole moment of an atom of diamagnetic material, paramagnetic material and ferromagnetic material are denoted by μ_d , μ_p and μ_f respectively, then
- A. $\mu_p = 0$ and $\mu_d = 0$ B. $\mu_d \neq 0$ and $\mu_p \neq 0$
C. $\mu_d \neq 0$ and $\mu_f \neq 0$ D. $\mu_d = 0$ and $\mu_p \neq 0$
31. A circular coil of diameter 21 cm is placed in a magnetic field of induction 10^{-4} T. The magnitude of flux linked with coil when the plane of coil makes an angle 30° with the field is
- A. 1.44×10^6 Wb B. 1.732×10^{-6} Wb

CMMC-2020

STD XII – MATHS, PHYSICS, CHEMISTRY | CBSE

Multiple Choice Questions | Number of questions: 120 | Max Marks: 120 | Time: 120 Minutes

C. $3.1 \times 10^{-6} \text{Wb}$

D. $4.2 \times 10^{-6} \text{Wb}$

32. A circular coil of radius 10 cm, 500 turns and resistance 2Ω is placed with its plane perpendicular to the horizontal components of the Earth's magnetic field. It is rotated about its vertical diameter through 180° in 0.25 s. Find the magnitude of the emf induced in the coil. Horizontal component of the Earth's magnetic field at the place is $3.00 \times 10^{-5} \text{ T}$.

A. $3 \times 10^3 \text{ V}$

B. $3.8 \times 10^{-3} \text{ mV}$

C. $3.8 \times 10^3 \text{ mV}$

D. $3.8 \times 10^{-3} \text{ V}$

33. If the rms current in a 50 Hz AC circuits is 5A, what is the value of the current $(1/300)\text{s}$ after it was zero?

A. $5\sqrt{2} \text{ A}$

B. $5\sqrt{3/2} \text{ A}$

C. $5/6 \text{ A}$

D. $5\sqrt{2} \text{ A}$

34. Same current is flowing in two Alternating circuits. The first circuit contains only inductance and the other contains only a capacitance. If the frequency of the end of AC is increased, the effect on the value of the current will be

A. Increase in the first circuit and decrease in the other

B. Increase in both the circuits

C. Decrease in both the circuits

D. Decrease in the first circuit and increase in the other

35. The conduction current is the same as displacement current when source is

A. Only AC

B. Only DC

C. Both AC and DC

D. Neither DC nor AC

36. You are given a parallel plate capacitor having capacitance of $2\mu\text{F}$. How would you establish an instantaneous displacement current of 1 m A in the space between its plates?

A. 550 V/s

B. 500 V/s

C. 525 V/s

D. 475 V/s

37. A ray of light travelling in water is incident on its surface open to air. The angle of incidence is θ , which is less than the critical angle. Then, there will be

A. Only a reflected and no refracted ray

B. Only a refracted ray and no reflected ray

C. A reflected and refracted ray and the angle between them would be less than $180^\circ - 2\theta$

D. A reflected ray and a refracted ray and the angle between them would be greater than $180^\circ - 2\theta$

38. The theory associated with secondary wavelets is

A. Doppler's effect

B. Special theory of relativity

C. Huygen's wave theory

D. None of these

CMMC-2020

STD XII – MATHS, PHYSICS, CHEMISTRY | CBSE

Multiple Choice Questions | Number of questions: 120 | Max Marks: 120 | Time: 120 Minutes

39. Two monochromatic beams A and B of equal intensities hits a screen. If number of photons hitting the screen by beam A is twice than by beam B. Then, $f_a : f_b$ is

- A. 1:1
B. 2:1
C. 1:2
D. 3:2

40. JJ Thomson's cathode ray experiment demonstrated that,

- A. cathode rays are stream of ions
B. all the mass of an atom is situated in the nucleus
C. the e/m of electrons is greater than the e/m of protons
D. the e/m ratio of the cathode ray particles change when a different gas is placed in the cathode rays

CHEMISTRY (40 X 1 = 40 MARKS)

1. Smallest portion of a crystal lattice which on repetition in different directions, generates the entire lattice is calledA... Here, A refers to?

- A. Unit Cell B. Crystal lattice C. Lattice point D. Lattice site

2. Which of the following point defects are shown by AgBr(s) crystals?

- A. Schotky defect B. Frenkel Defect C. Metal Excess Defect D. Metal Deficiency Defect

3. The value of Bohr magneton, μ_B is ?

- A. $9.27 \times 10^{-27} \text{ Am}^2$ B. $9.27 \times 10^{-22} \text{ Am}^2$ C. $11.27 \times 10^{-22} \text{ Am}^2$ D. $11.27 \times 10^{-24} \text{ Am}^2$

4. The ratio of volume of a hexagonal lattice unit cell to a tetragonal lattice unit cell is ? (both having same respective length)

- A. 1 B. $\frac{2}{\sqrt{3}} \frac{a^2 c}{\sqrt{3} b}$ C. $\frac{\sqrt{3}}{2} abc$ D. $\frac{2}{3\sqrt{3}}$

5. Which amongsts these is a ferro electric compound?

- A. $\text{K}_3[\text{Fe}(\text{CN})_6]$ B. BaTiO_3 C. Pb_2O_3 D. None of these

6. Identify the solute and solvent in the option given below, for a solution as Amalgum of Mercury with Sodium

Solute	Solvent
A. Solid	Liquid
B. Solid	Solid
C. Liquid	Solid
D. Solid	Gas

CMMC-2020

STD XII – MATHS, PHYSICS, CHEMISTRY | CBSE

Multiple Choice Questions | Number of questions: 120 | Max Marks: 120 | Time: 120 Minutes

7. Considering the formation, breaking and strength of Hydrogen bond, predict which of the following mixtures will show a positive deviation from Raoult's law :

- A. Methanol and Acetone
- B. Chloroform and Acetone
- C. Nitric acid and Water
- D. Phenol and Aniline

8. 1.26 gm of protein is present in the aqueous solution of 200 cm³. Calculate the Molar mass of the protein if the osmotic pressure of such solution is 2.57×10^{-3} bar at 300K.

- A. 61000 gm/mol
- B. 61038 gm/mol
- C. 60000 gm/mol
- D. 61009 gm/mol

9. What is the vapour pressure of solution prepared by mixing 25.5 gm of CHCl₃ and 40 g of CH₂Cl₂ at 298K ?

- A. 347.9 mmHg
- B. 300 mmHg
- C. 200 mmHg
- D. 147.9 mmHg

10. 45g of ethylene glycol (C₂H₆O₂) is mixed with 600 g of water. Find out the freezing point of the solution.

- A. 273.15K
- B. 270.95K
- C. -273.15K
- D. -270.95K

11. Which of the following statement(s) is/are true about Daniel cell?

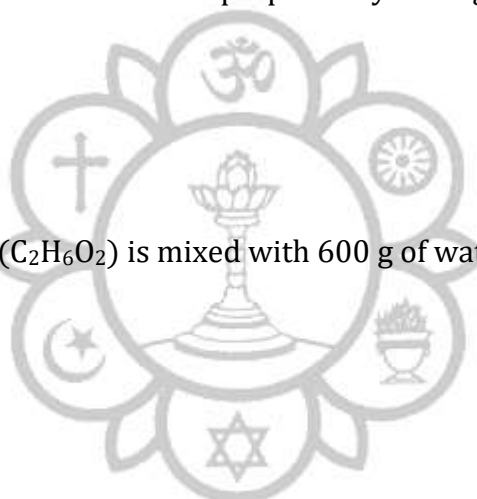
- A. Its electrical potential is 2.1V
- B. It is also called Galvanic cell when concentration of Zn²⁺ and Cu²⁺ in unity.
- C. Unit of concentration used in Daniel cell is (dm³mol⁻¹)
- D. All of the above

12. The plot of molar conductance vs \sqrt{C} in strong electrolyte is :

- A. Circular
- B. Linear
- C. Parabolic
- D. Sinusoidal

13. In a hydrogen-oxygen fuel cell, combustion of hydrogen occurs to :

- A. Produce high purity water
- B. Remove adsorbed oxygen from electrode surface
- C. Generate heat
- D. Create potential difference between two electrodes.

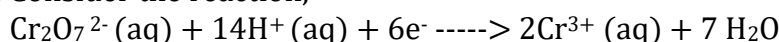


CMMC-2020

STD XII – MATHS, PHYSICS, CHEMISTRY | CBSE

Multiple Choice Questions | Number of questions: 120 | Max Marks: 120 | Time: 120 Minutes

14. Consider the reaction,



What is the quantity of electricity in coulombs needed to reduce one mole of $\text{Cr}_2\text{O}_7^{2-}$?

- A. 6F
- B. 96500 C
- C. 57900 C
- D. 5790 C

15. If $[\text{H}_3\text{O}^+] = 2.0\text{M}$, $[\text{Fe}^{3+}] = 2.0\text{M}$, $[\text{Fe}^{2+}] = 0.5\text{M}$, $[\text{Mn}^{2+}] = 0.5\text{M}$, $[\text{MnO}_4^-] = 1.0\text{M}$.

Calculate the emf of the cell.

- A. -0.747 V
- B. +0.747 V
- C. -0.733 V
- D. +0.736 V

16. Suppose P is the initial concentration of reaction, then the half-life period of a reaction of n^{th} order is proportional to :

- A. P^{1-n}
- B. P^{n+1}
- C. P^n
- D. P^{n-1}

17. Suppose E_f and E_b are the activation energies of the forward and backward reactions and the reaction is exothermic, then

- A. $E_f < E_b$
- B. $E_f > E_b$
- C. $E_b = E_f$
- D. No defined relation between E_f and E_b

18. Effect of temperature on the rate of reaction is given by :

- A. Arrhenius Equation
- B. Clausius-Clapeyron equation
- C. Gibbs-Helmholtz equation
- D. Kirchhoff's equation

19. Rate of a reaction can be expressed by Arrhenius equation as $k = Ae^{\frac{-E_a}{RT}}$. Here, E is :

- A. Total energy of the reacting molecules at a temperature, T
- B. The energy above which colliding molecules will react.
- C. The energy below which colliding molecules will not react.
- D. The fraction of molecules with energy greater than the activation energy of the reaction.

20. **Assertion (A)** : The multi molecular reactions are quite rare in comparison with bimolecular reactions.

Reason (R) : At normal pressure, triple collisions are much less frequent than double ones.

CMMC-2020

STD XII – MATHS, PHYSICS, CHEMISTRY | CBSE

Multiple Choice Questions | Number of questions: 120 | Max Marks: 120 | Time: 120 Minutes

- A. Both (A) and (R) are correct; (R) is correct explanation of (A).
- B. Both (A) and (R) are correct; (R) is not the correct explanation of (A).
- C. (A) is correct ; (R) is incorrect.
- D. (A) is incorrect; (R) is correct.

21. Which of the following option is correct for the spontaneous adsorption process?

- A. ΔH and ΔS will be highly negative
- B. ΔH and ΔS will be highly positive
- C. ΔH should be highly positive and ΔS should be highly negative.
- D. ΔH should be highly negative and ΔS should be less negative.

22. Which of the following is not true about Colloids ?

- i. A colloid is a homogeneous system.
- ii. Range of diameter of colloidal particles is 1 – 1000 nm.
- iii. Colloidal particles have large surface area per unit mass.

Choose the correct option.

- A. (i) and (ii)
- B. (i) and (iii)
- C. (i), (ii) and (iii)
- D. Only (i)

23. For soap, the CMC is in the range of :

- A. $10^4 - 10^3 \text{ mol L}^{-1}$
- B. $10^{-4} - 10^{-3} \text{ mol L}^{-1}$
- C. $10^{-2} - 10^{-1} \text{ mol L}^{-1}$
- D. $10^{-4} - 10^{-1} \text{ mol L}^{-1}$

24. The droplets in emulsions are often (A) charged and precipitated by the addition of (B). Here, A and B are refer to :

- A. (A) - Positively , (B) - Analyte
- B. (A) - Positively , (B) - Electrolyte
- C. (A) - Negatively , (B) - Electrolyte
- D. (A) - Negatively , (B) - Analyte

25. Which of the following will show Tyndall effect?

- A. Aqueous solution of soap below critical micelle concentration.
- B. Aqueous solution of soap above critical micelle concentration.
- C. Aqueous solution of Sodium chloride.
- D. Aqueous solution of sugar.

26. The correct order of abundance of the elements in Earth's crust is :

- A. $O > Si > Al > Fe$
- B. $Fe > Al > Si > O$
- C. $Si > Fe > Al > O$
- D. $Al > Fe > O > Si$

CMMC-2020

STD XII – MATHS, PHYSICS, CHEMISTRY | CBSE

Multiple Choice Questions | Number of questions: 120 | Max Marks: 120 | Time: 120 Minutes

27. Roasting and Calcination are :

- A. Use for the purification of metals.
- B. Usually carried out in reverberatory furnace
- C. Employed for the concentration of the ore.
- D. Different names of the same operation.

28. **Assertion (A)** : The method of zone refining of metals is based on the principle of greater mobility of pure metal than that of impurities.

Reason (R) : Metals like Ga, Ge can be refined by this method.

- A. Both (A) and (R) are correct; (R) is correct explanation of (A).
- B. Both (A) and (R) are correct; (R) is not the correct explanation of (A).
- C. (A) is correct; (R) is incorrect.
- D. (A) is incorrect; (R) is correct.

29. On mixing Cu ore with Silica, in reverberatory furnace Copper Matte is obtained. It contains:

- A. Sulphides of Cu(II) and Fe(III).
- B. Sulphides of Cu(I) and Fe(II).
- C. Sulphides of Cu(II) and Fe(II).
- D. Sulphides of Cu(I) and Fe(III).

30. The least stable oxide among the following is :

- A. Sb_2O_3
- B. Ag_2O
- C. CuO
- D. ZnO

31. Angular shape of Ozone molecule consists of :

- A. 1-sigma and 1- pi bond
- B. 2- sigma and 2- pi bond
- C. 1- sigma and 2- pi bond
- D. 2- sigma and 1 - pi bond.

32. When HCl reacts with finely powdered iron, it forms ferrous chloride and not ferric chloride because:

- A. Its reaction with iron produces H_2 molecule.
- B. Liberation of Hydrogen prevents the formation of ferric chloride.
- C. Both (A) and (B)
- D. None of the above.

33. The hybrid state of Halogen atom is sp^3 in :

- A. ClO_4^-
- B. ClO^-
- C. ClO_3^-
- D. (A), (B) and (C)

34. The ease of liquefaction of noble gases increases in the order :

CMMC-2020

STD XII – MATHS, PHYSICS, CHEMISTRY | CBSE

Multiple Choice Questions | Number of questions: 120 | Max Marks: 120 | Time: 120 Minutes

- A. He > Ne > Ar > Kr > Xe
- B. Xe > Kr > Ar > He > Ne
- C. He < Ne < Ar < Kr < Xe
- D. Xe < He < Ne < Ar < Kr

35. In the ring test for the NO_3^- ion, a brown ring is formed due to the formation of :

- A. $\text{FeSO}_4 \cdot \text{NO}_2$
- B. $\text{FeSO}_4 \cdot \text{HNO}_3$
- C. $[\text{Fe}(\text{H}_2\text{O})_5 \text{NO}]^{2+}$
- D. $[\text{Fe}(\text{H}_2\text{O})_4 (\text{NO})_2]^{2+}$

36. Which of the compounds is used as the starting material for the preparation of potassium dichromate ?

- A. $\text{K}_2\text{SO}_4 \cdot \text{Cr}_2(\text{SO}_4)_3 \cdot 24\text{H}_2\text{O}$ (Chrome alum)
- B. PbCrO_4 (Chromite yellow)
- C. FeCr_2O_4 (Chromite)
- D. $\text{PbCrO}_4 \cdot \text{PbO}$ (Chrome red)

37. Which of the following statements is not correct?

- A. Copper liberates Hydrogen from acids.
- B. In its higher oxidation states, manganese forms stable compounds with oxygen and fluorine.
- C. Mn^{3+} and CO^{3+} are oxidising agents in aqueous solutions.
- D. Ti^{2+} and Cr^{2+} are reducing agents in aqueous solutions.

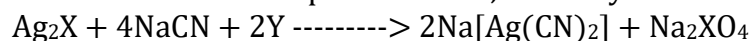
38. Potassium manganate(K_2MnO_4) is formed when :

- A. Chloride is passed into aqueous KmnO_4 solution.
- B. Manganese dioxide is fused with potassium hydroxide in air
- C. Formaldehyde reacts with potassium permanganate in presence of a strong alkali.
- D. Potassium permanganate reacts with concentrated sulphuric acid.

39. The protection of steel by chrome plating is due to :

- A. Cathodic protection.
- B. Anodic protection.
- C. Covering of steel surface.
- D. Formation of alloy with iron.

40. In the extraction of silver from argentite ore, the ore is treated with dilute solution of NaCN in water in the presence of Y, whereby the following reaction takes place :



X and Y in this reaction are represented by:

- A. Cl and S
- B. S and O_2
- C. O and O_2
- D. O and S